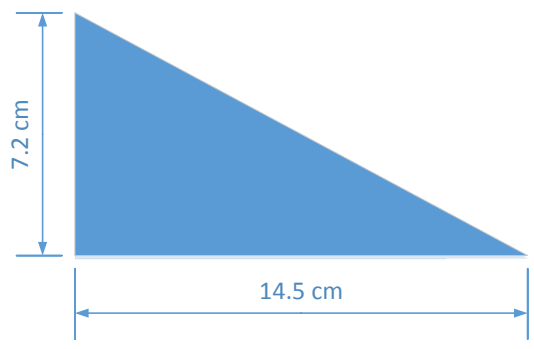
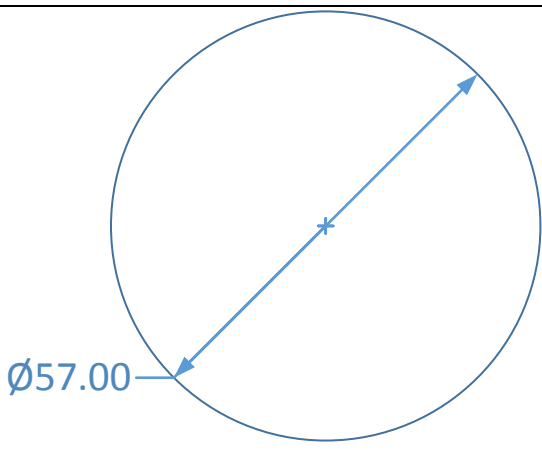


Name: _____ Class: _____ Maths Group: _____

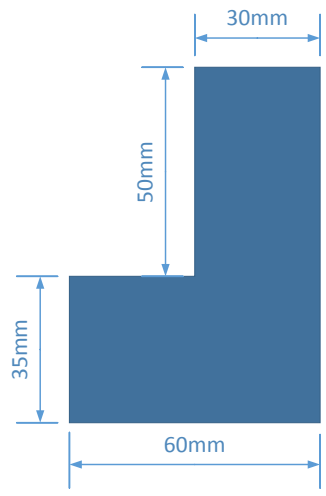
Six a day



1. What is the area of this triangle?



2. What is the circumference of this circle?



3. What is the perimeter of this shape?

<p>4. Prove that if you add two odd numbers, you always end up with an even number.</p>	
<p>5. Find the median average of the following set of numbers. { 4, 6, 7, 3, 5, 7, 5, 8, 9, 22 }</p>	
<p>6. Evaluate:</p> <p>$27^{2/3}$</p> <p>$1000^{2/3}$</p>	