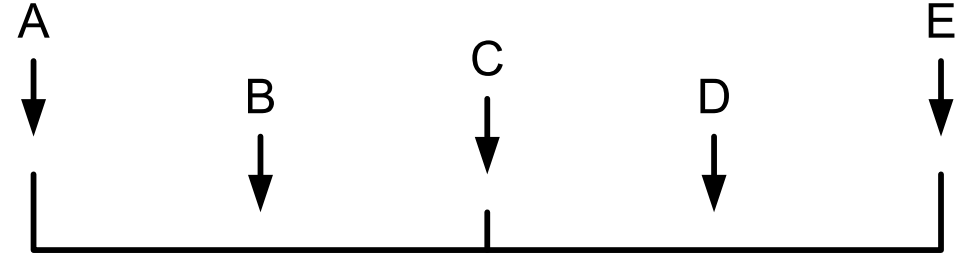



A Draw and label the probability scale with the words even, certain, unlikely, impossible, likely.

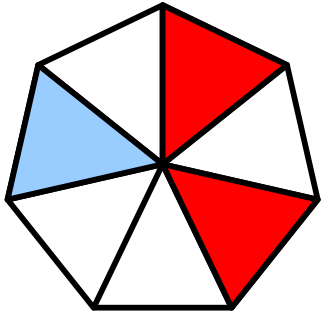


B Write a word and a possible number for each of the positions on the probability scale.



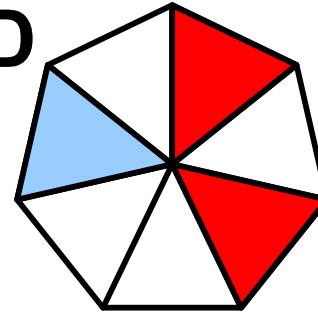
 www.achildsguideto.com

C The seven sided spinner is a fair spinner.



What are the chances of the spinner landing on red?

D The seven sided spinner is a fair spinner.



The spinner is spun two times.

What are the chances of the spinner landing a white on both occasions?