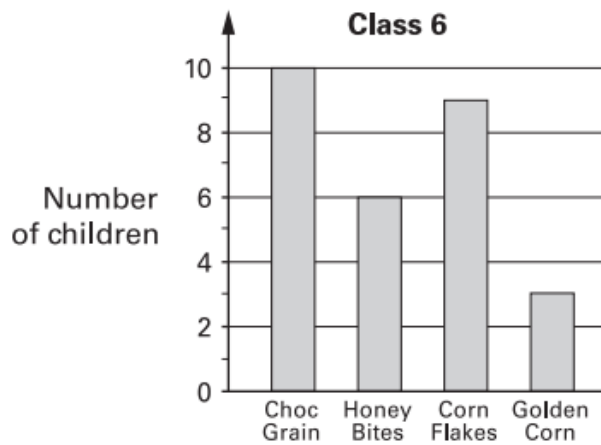


3

Tom does a survey of children's favourite breakfast cereals.

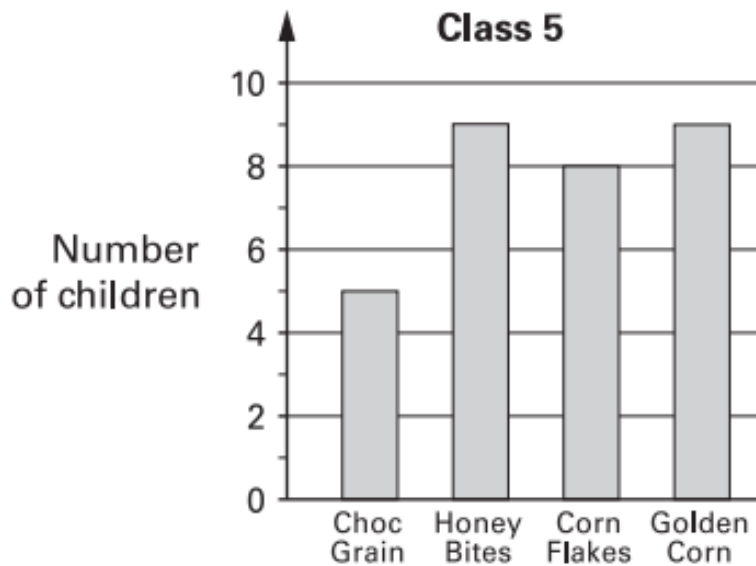
These are the results for Class 6



How many **more** children in Class 6 prefer **Choc Grain** than **Golden Corn**?



These are the results for Class 5



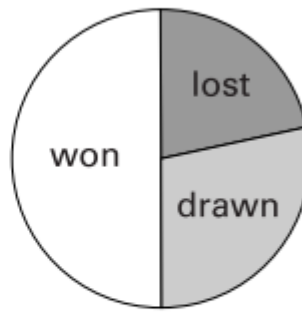
How many children in **both** classes like **Honey Bites** best?



The pie charts show the results of a school's netball and football matches.



Netball



Football

The netball team played **30** games.

The football team played **24** games.

Estimate the percentage of games that the **netball team lost**.

 %

David says,

'The two teams won the same number of games.'

Is he correct?
Circle Yes or No.



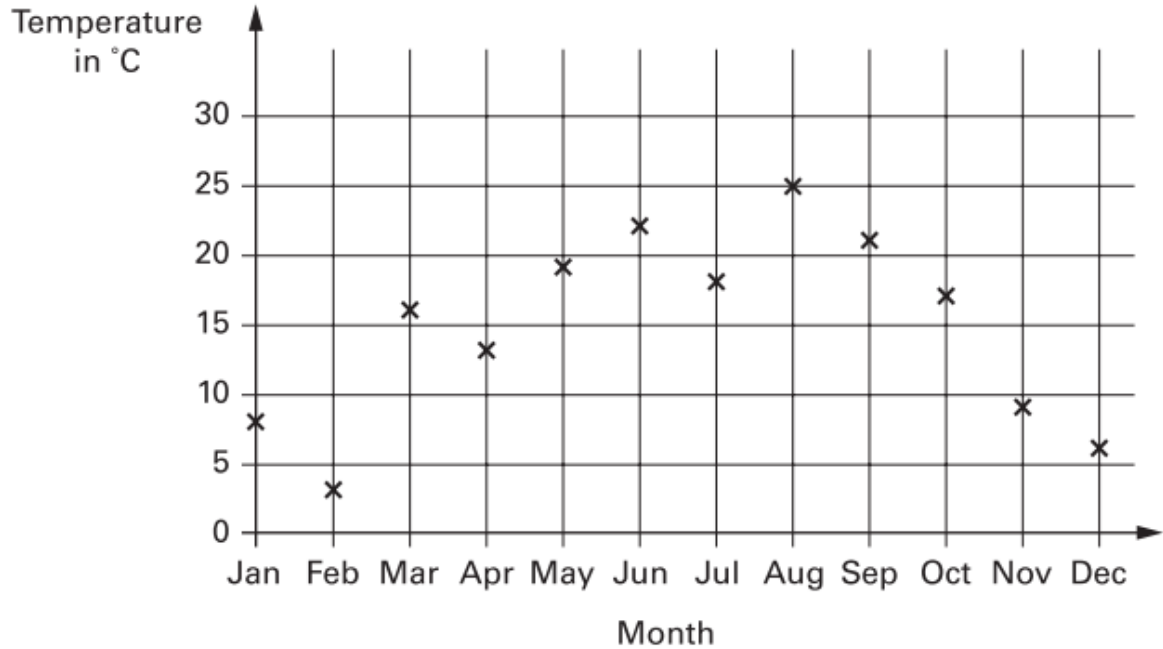
Yes / No

Explain how you know.

9

Abbie takes the temperature outside at midday on the first day of each month.

The graph shows her results from January to December.



How many months on the graph show a temperature between 10°C and 20°C ?



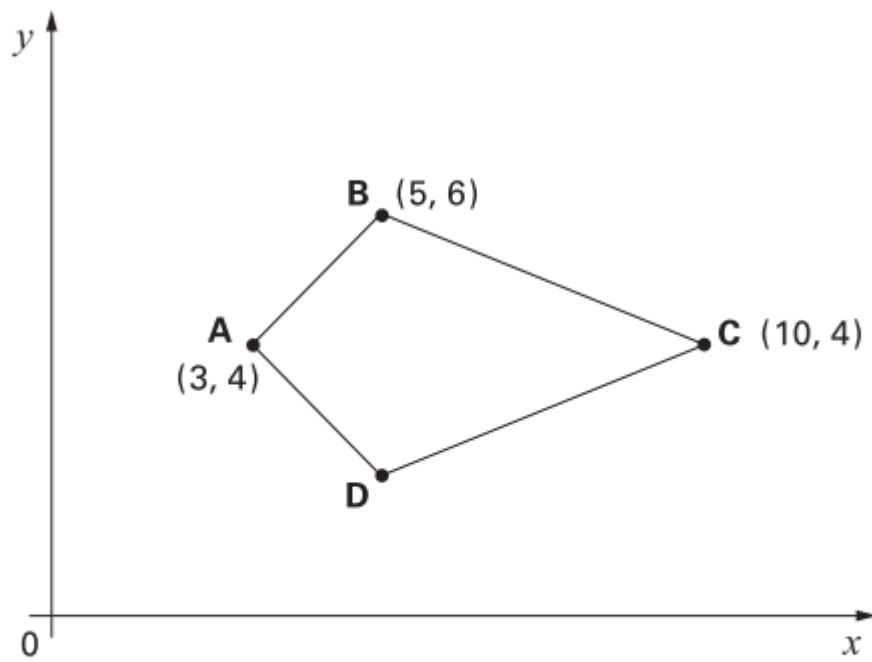
Find the difference in temperature shown on the graph between **July** and **August**.



degrees

20

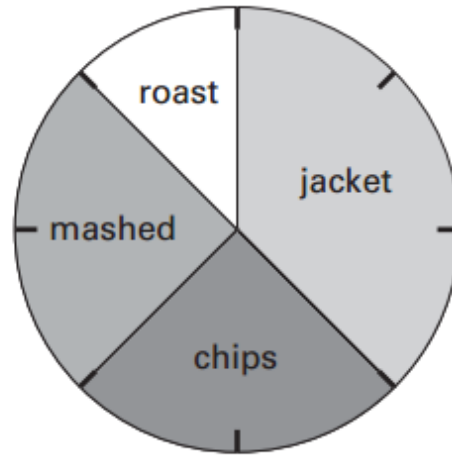
Here is a kite.



Write the coordinates of point D.



This pie chart shows how the children in Class 6 best like their potatoes cooked.



32 children took part in the survey.

Look at the four statements below.

For each statement put a tick (✓) if it is **correct**.
Put a cross (✗) if it is **not correct**.



10 children like chips best.

25% of the children like mashed potatoes best.

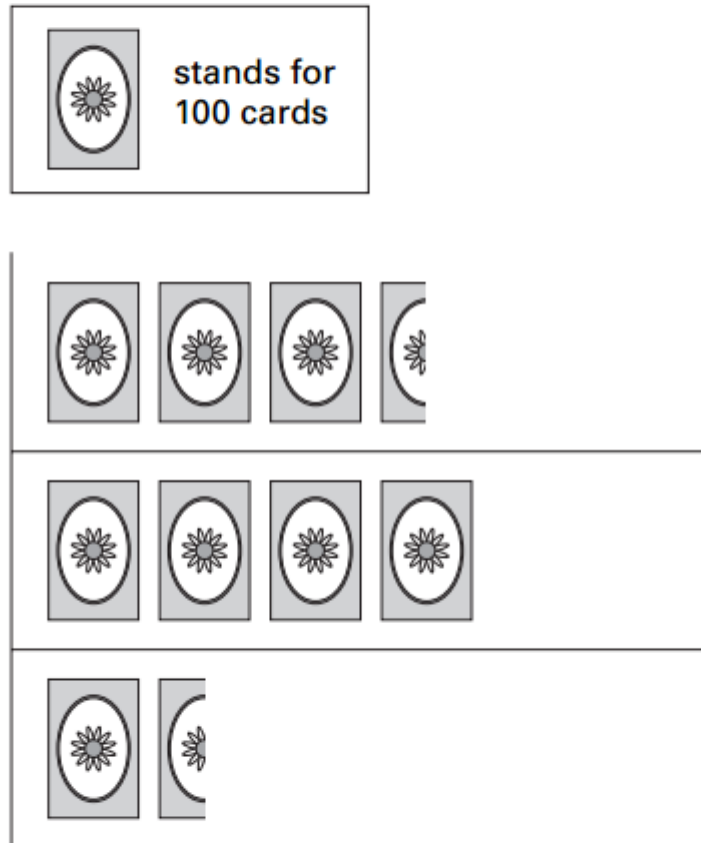
$\frac{1}{5}$ of the children like roast potatoes best.

12 children like jacket potatoes best.

A shop sells different kinds of greeting cards.



This pictogram shows how many they sold in a week.

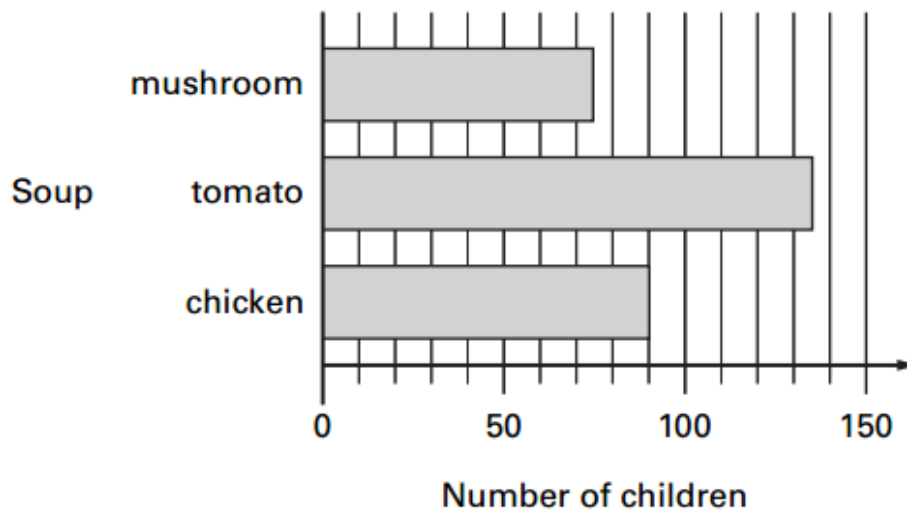


Estimate how many Birthday cards were sold.



18

All the children at Park School chose their favourite soup. The graph shows the results.



How many **more** children chose **chicken** soup than **mushroom** soup?



Robbie says,

'More than half of the children chose tomato soup'.

Is he correct?
Circle Yes or No.



Yes / No